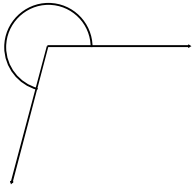


Name: _____

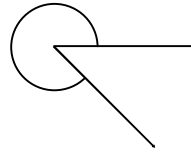
Classify and measure the angles.

1.



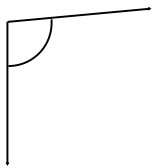
255° Reflex

2.



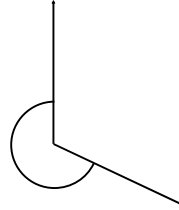
315° Reflex

3.



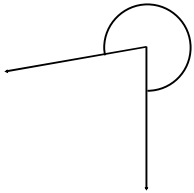
95° Obtuse

4.



245° Reflex

5.



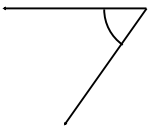
280° Reflex

6.



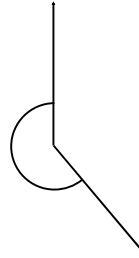
190° Reflex

7.



55° Acute

8.




220° Reflex

9.



155° Obtuse

10.



290° Reflex